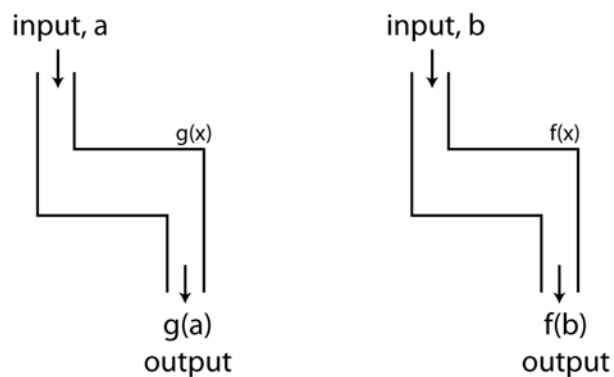


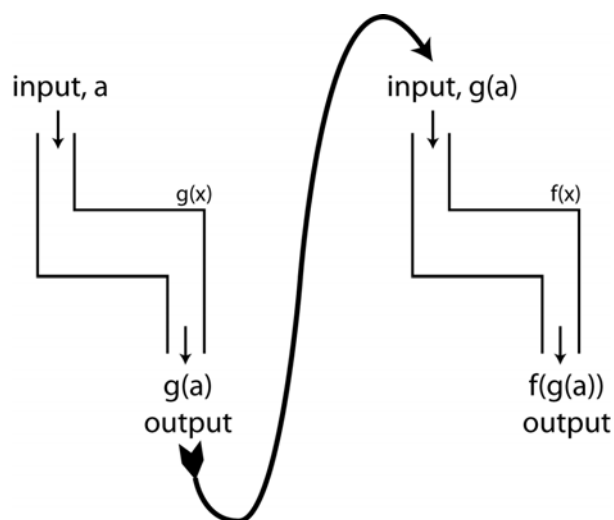
College algebra  
Composition of Functions  
Section 2.3

We will nest functions  
with composition.

**Composition of functions:** It will help if you think of functions as machines that take an input and produce an output. Consider two functions,  $f(x)$  and  $g(x)$ , pictured below.



Let's suppose we apply the function  $g$  to a number, **and then** put that output into the function  $f$ . That is the idea of composition and is pictured below.



Notice how the final  
output is denoted.

If plain old function  
notation is hard for you,  
review it before  
attempting this section.

We will start our examples with a situation that helps justify why you would ever want to do this composition stuff.

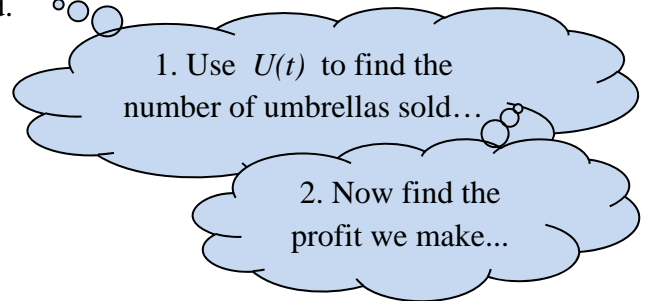
expl 1: A popular umbrella manufacturer has this information.

We can calculate  $P(x) = 2x^2 - 3x$ , where  $P(x)$  represents the monthly profit of the company (in dollars) and  $x$  represents the number of umbrellas sold that month,  $x \geq 0$ .

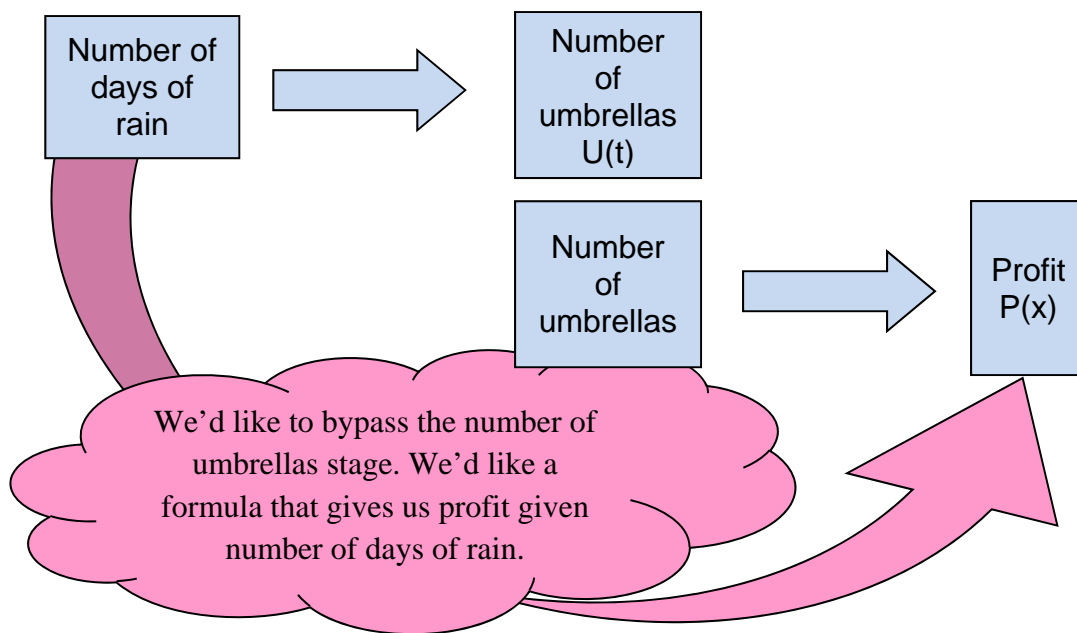
We can calculate  $U(t) = 3t + 4$ , where  $U(t)$  represents the number of umbrellas sold per month and  $t$  represents the number of days it rains that month,  $0 \leq t \leq 31$ .

We are interested in how profit is related to the number of days of rain. Let's find the equation. But first, we'll investigate the situation with a specific example.

Specific example: Say we have had 12 days of rain this month. Find the number of umbrellas we can expect to sell and then the profit this should yield.



Notice how this was a two-step process. Composition of functions can shortcut these steps. I have illustrated this below.

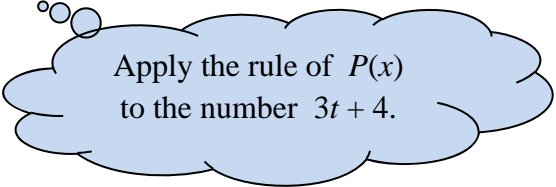


Let's find the relationship between days of rain and profit.

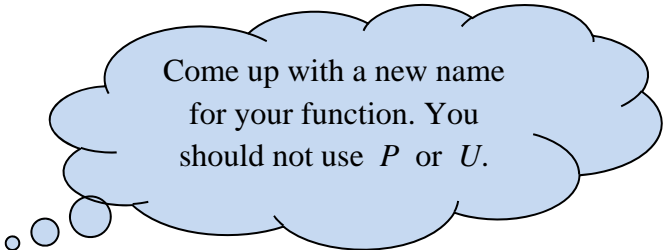
We know  $P(x) = 2x^2 - 3x$  where  $x$  represents the number of umbrellas.

But  $U(t)$  also represents the number of umbrellas. So we can substitute  $U(t)$  in for  $x$  to find  $P(U(t))$ .

Do it now to make a new function that tells us the profit given the number of days of rain.



Apply the rule of  $P(x)$  to the number  $3t + 4$ .

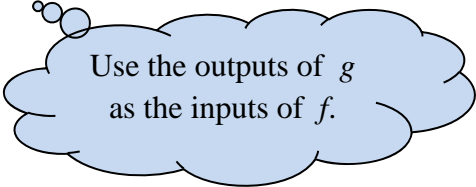


Come up with a new name for your function. You should not use  $P$  or  $U$ .

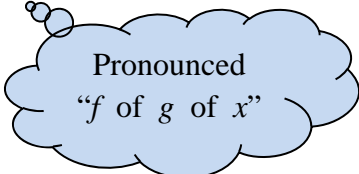
Check your answer by using your new function to calculate the profit when it rains 12 days this month. Does it match what you found earlier?

**Composition Notation:** We used the nested notation for the previous example. The following notations are equivalent.

$$(f \circ g)(x) = f \circ g = f(g(x))$$



Use the outputs of  $g$  as the inputs of  $f$ .



Pronounced  
“ $f$  of  $g$  of  $x$ ”

expl 2: Let  $f$  and  $g$  be defined below. Find the following.

$$f(x) = 3x + 2$$

$$g(x) = 2x^2 - 1$$

a.) Find  $(f \circ g)(4)$ .

$$(f \circ g)(4) = f(g(4))$$

But what is  $g(4)$ ?

Remember  $f(x)$  and  $g(x)$  are rules. They tell you what to do to the  $x$  value.

b.) Find  $(f \circ f)(1)$ .

c.) Find  $(f \circ g)(x)$ .

d.) Find  $(g \circ f)(x)$ .

**Domain of Composed Functions:** The domain of  $f(g(x))$  is all real numbers  $x$  that are in the domain of  $g$  **and** such that  $g(x)$  is in the domain of  $f$ .

expl 3: Find  $f(g(x))$  and determine its domain.

$$f(x) = 5x + 7$$

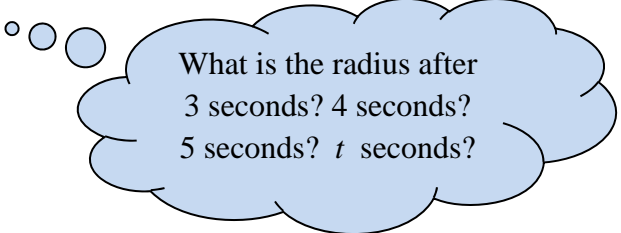
$$g(x) = \sqrt{x}$$

**To find the domain of  $f(g(x))$ :**  
What is the domain of  $g(x)$ ? What is the domain of  $f(x)$ ? Which  $x$  values would create  $g(x)$  values that could **not** be inputted into  $f(x)$  [i.e. not in its domain]?

**Alternative method:** Find the composed function and determine its domain. Then *also exclude* those values that do not work in the interior function.

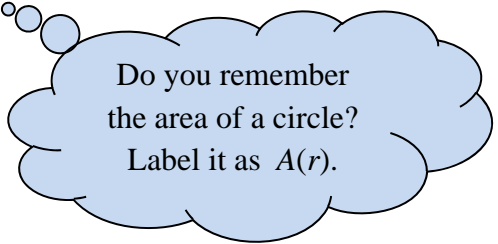
expl 4: Bob throws a rock into a still lake. The rock causes a circular ripple that gets bigger and bigger. The radius of the ripple is increasing at the rate of 2.6 feet per second. Answer the questions that follow.

a.) Find the function for the radius of the circular ripple at time  $t$ .



What is the radius after  
3 seconds? 4 seconds?  
5 seconds?  $t$  seconds?

b.) Find the function for the area of the circular ripple with respect to the radius  $r$ .



Do you remember  
the area of a circle?  
Label it as  $A(r)$ .

c.) Find the composed function  $(A \circ r)(t)$ . What, in words, does this tell us about the ripple?

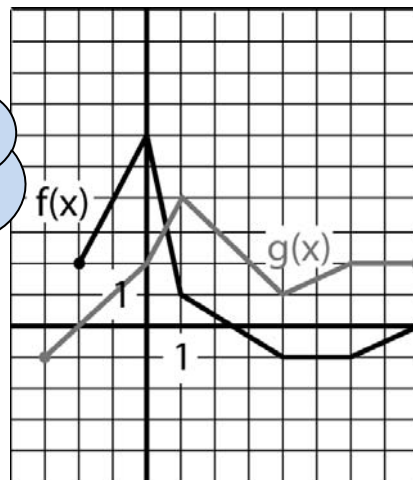
### Worksheet: The Composition of Functions:

This worksheet provides practice in performing compositions. There is an application that will help explain why composition is so useful.

expl 5: Use the graphs to the right to find the following.

a.)  $f(g(1))$

Start on the inside. Find  $g(1)$  on the graph...



b.)  $g(f(-2))$

expl 6: Given the functions  $h(x)$  below, find two functions  $f(x)$  and  $g(x)$  such that  $h(x) = f(g(x))$ .

a.)  $h(x) = \sqrt{4x^2 - 3}$

There are many answers.

b.)  $h(x) = \frac{(x+2)^2}{(x+2)-5}$